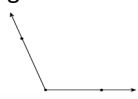

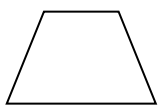
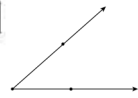


JULY 2022

Sunday	Monday	Tuesday	Wednesday	Thursday	Friday	Saturday
					1 $> < \text{ or } =$ 358 ____ 538	2 $k \times 7 = 28$ $k = \underline{\hspace{2cm}}$
3 $\begin{array}{r} 763 \\ + 647 \\ \hline \end{array}$	4 Measure the length of your bed in	5 What type of angle is this? 	6 Do 27 jumping jacks. Do 17 more. How many did you do in all?	7 Circle the tens place. 3,791	8 $> < \text{ or } =$ 8763 ____ 8763	9 Count the spoons in your silverware drawer. Multiply that by 3.
10 Name the shape: 	11 $9 \times 7 = 63$ Write the above problem 5 times.	12 Write in standard form: $3000+500+40+6$	13 $\begin{array}{r} 43 \\ \times 2 \\ \hline \end{array}$	14 What type of angle is this?	15 Subtract 99 from the last 4 digits of your home phone OR mother's cell .	16 $p \times 3 = 24$ $p = \underline{\hspace{2cm}}$
17 $\begin{array}{r} 700 \\ - 187 \\ \hline \end{array}$	18 Name the shape: 	19 $7 \times 8 = 56$ Write the above problem 5 times.	20 $\begin{array}{r} 328 \\ - 187 \\ \hline \end{array}$	21 	22 How much money in all? 1 quarter, 6 dimes, 3 nickels, 8 pennies	23 Measure the height of your bedroom door in inches.
24 Circle the hundreds place. 8159	25 $\begin{array}{r} \\ 4 \overline{) 24} \\ \hline \end{array}$	26 Count the mirrors in your house. Multiply that by 2.	27 $\begin{array}{r} 936 \\ + 407 \\ \hline \end{array}$	28 $> < \text{ or } =$ 6,987 ____ 9,678	29 How many steps do you take to get from your front door to your bedroom door? Multiply that by 7.	30 Write in word form: 378
31 There are ____ feet in 1 yard.						